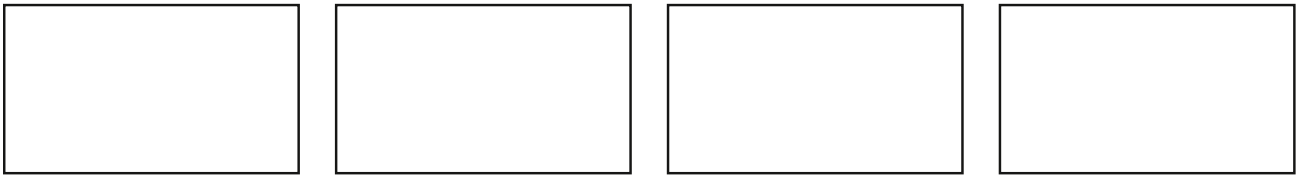


Fractions of shapes

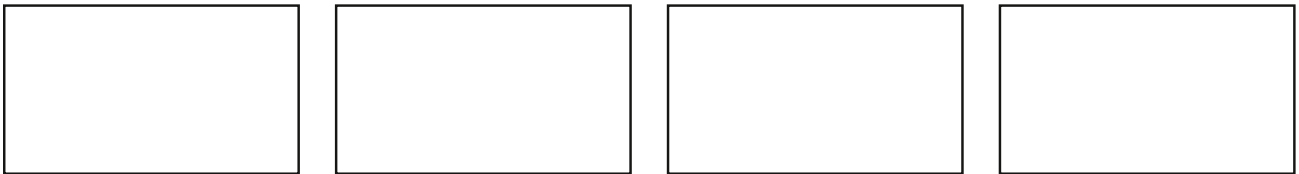
I can:

- Recognise, find, name and write fractions $\frac{1}{3}$, $\frac{1}{4}$, $\frac{2}{4}$ and $\frac{3}{4}$ of shapes.
-

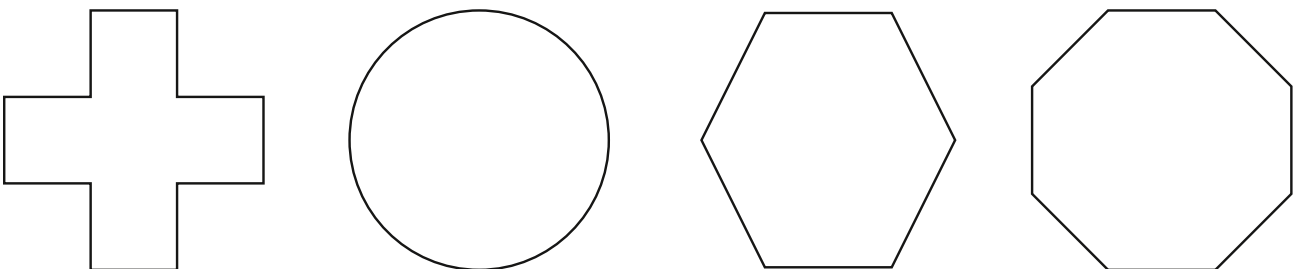
1. Shade **half** of each rectangle in a different way.



2. Shade one **quarter** of each rectangle in a different way.



3. Shade three **quarters** of each shape.



4. Tick the **two** shapes that are divided into **thirds**.

